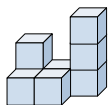







Solve each problem.

Answers

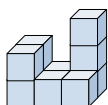
1) If you were looking at the 3d shape from the right side what would you see?






- A.  B.  C. 

1. _____

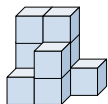
2) If you were looking at the 3d shape from the left side what would you see?






- A.  B.  C. 

2. _____

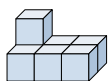
3) If you were looking at the 3d shape from the left side what would you see?






- A.  B.  C. 

3. _____

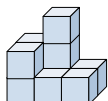
4) If you were looking at the 3d shape from the back what would you see?






- A.  B.  C. 

4. _____

5) If you were looking at the 3d shape from the right side what would you see?



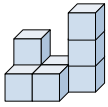
- A.  B.  C. 




5. _____



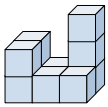
Solve each problem.




1) If you were looking at the 3d shape from the right side what would you see?



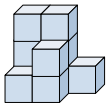
- A.  B.  C. 




2) If you were looking at the 3d shape from the left side what would you see?



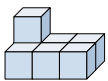
- A.  B.  C. 

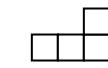


3) If you were looking at the 3d shape from the left side what would you see?



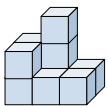
- A.  B.  C. 




4) If you were looking at the 3d shape from the back what would you see?



- A.  B.  C. 

5) If you were looking at the 3d shape from the right side what would you see?



- A.  B.  C. 

Answers

1. **B**
 2. **B**
 3. **A**
 4. **A**
 5. **A**